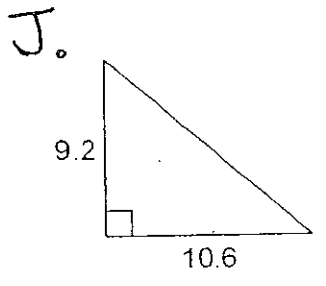
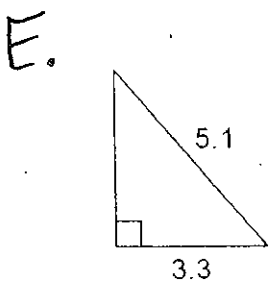
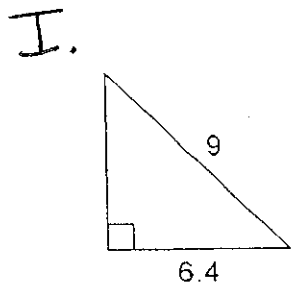
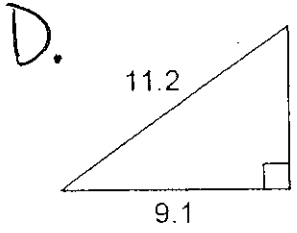
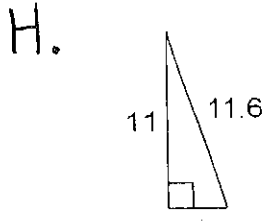
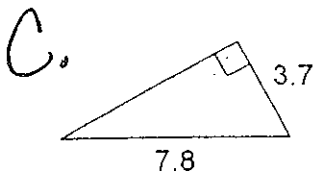
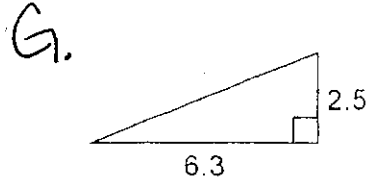
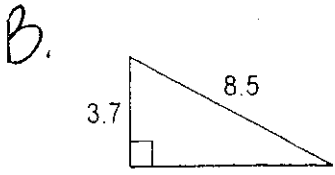
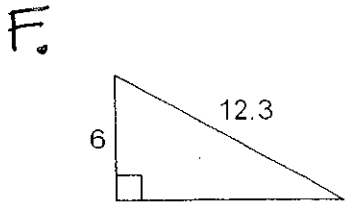


Show Your Work!  
Match the triangle with the correct answer rounded to the nearest tenth.



K.  $a = 7.9, b = ?, c = 8.9$

N.  $a = 9.3, b = 6.4, c = ?$

L.  $a = 8.6, b = 3.8, c = ?$

O.  $a = ?, b = 5, c = 13.6$

M.  $a = ?, b = 10, c = 13.3$

P.  $a = 7.7, b = ?, c = 8.9$

1. _____	<b>6.3</b>
2. _____	<b>14.0</b>
3. _____	<b>11.3</b>
4. _____	<b>6.5</b>
5. _____	<b>6.8</b>
6. _____	<b>3.1</b>
7. _____	<b>3.7</b>
8. _____	<b>4.1</b>
9. _____	<b>6.9</b>
10. _____	<b>3.9</b>
11. _____	<b>8.8</b>
12. _____	<b>10.7</b>
13. _____	<b>12.6</b>
14. _____	<b>4.5</b>
15. _____	<b>7.7</b>
16. _____	<b>9.4</b>